



B.K. BIRLA CENTRE FOR EDUCATION

SARALA BIRLA GROUP OF SCHOOLS
A CBSE DAY-CUM-BOYS' RESIDENTIAL SCHOOL
PERIODIC TEST -1 2026-27



MATH L-1

Class: II
Date : 11.06.26
Admission no:






Time: 1hr
Max Marks: 25
Roll no:

General Instructions:

- Attempt the questions based on the specific instructions for each part.
- Review your answers before submitting your answer sheet.
- All questions are compulsory.

a) Count and write the number in the box.

1 x 5 = 5

1.		
2.		
3.		
4.		
5.		

B. Write the Numeral for each of the given number names

5 x 1 = 5

1. Ninety -One - _____
2. Fifty – four - _____
3. Sixty – Nine - _____
4. Ninety- _____
5. Hundred- _____

C. Do as directed:

3x 2= 6

1. Complete the sequence by counting forward

a. 20 ___ 22 ___

b. 11 12 ___ 15


2. Complete the sequence by counting Backward


a. 9 ___ 7 ___

b. 12 11 ___ 10 ___ 9 ___ 8

3. Write the numeral for each set of stick

1 bundle = 10

a.  = _____

b.  = _____

C. Solve the following questions as directed

3 x 3 = 9

1. Write the number names of the following numbers:

a. 12: _____

b. 28: _____

c. 30: _____

d. 5: _____

e. 14: _____

f. 7: _____

2. What comes in between:

a. 23 ___ 25

b. 32 ___ 34

c. $20 \underline{\quad} 22$

d. $9 \underline{\quad} 11$

e. $1 \underline{\quad} 3$

f. $7 \underline{\quad} 9$

3. Write numbers from 1 to 50.

1				
10				100